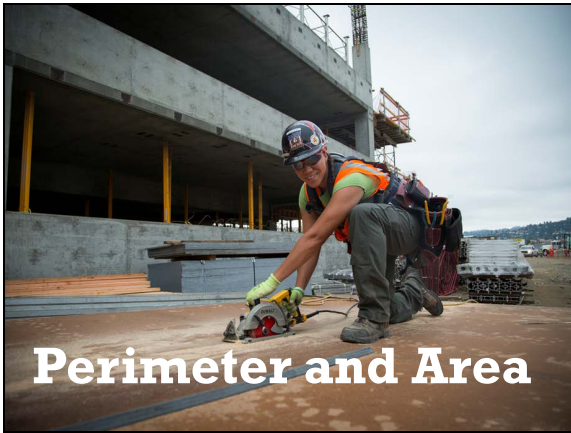


# Perimeter and Area Slides



---

---

---


---

---

---

---

---



---

---

---

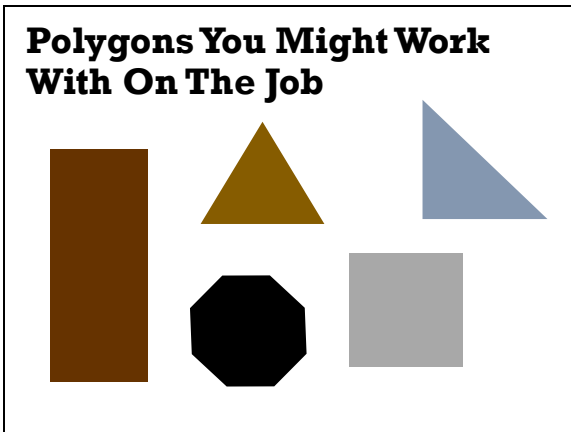
---

---

---

---

---



---

---

---

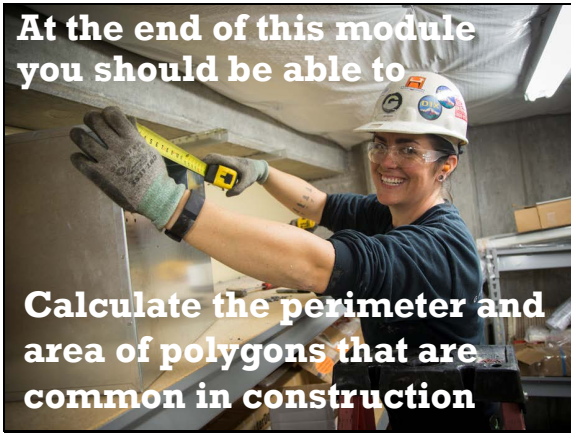
---

---

---

---

---



---

---

---

---

---

---

---

---

**Perimeter = the length around the outside of an object.**

$6' + 3' + 6' + 3' = 18'$

---

---

---

---

---

---

---

---

**What is the perimeter of this ceiling?**

---

---

---

---

---

---

---

---

**If one side of this square concrete pad is 10 feet...**

**... what would the perimeter of the pad be?**




---

---

---

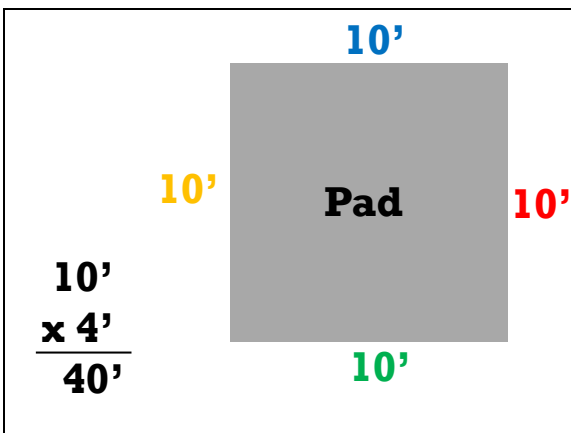
---

---

---

---

---




---

---

---

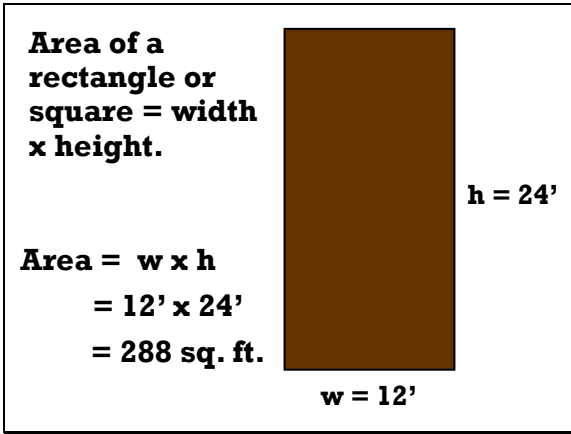
---

---

---

---

---




---

---

---

---

---

---

---

---



**1 square foot**

**Area = w x h**  
**= 12' x 24'**  
**= 288 sq. ft.**

w = 12'      h = 24'

---

---

---

---

---

---

---

---

---

---

---

---

---

---

---

---

---

---

---

---

---

---

---

---

---

---

---

---

---

---



**What is the perimeter of this field?**

60'

25'

20'

15'

40'

40'

---

---

---

---

---

---

---

---

---

---

---

---

---

---

---

---

---

---

---

---

---

---

---

---

---

---

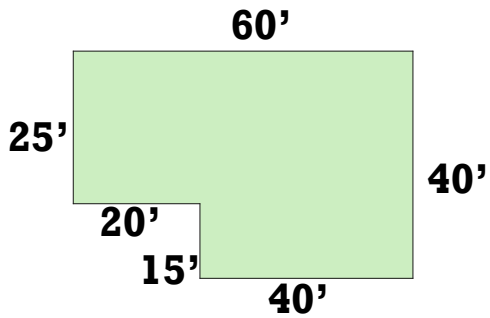
---

---

---

---

What is the area of this field?



---

---

---

---

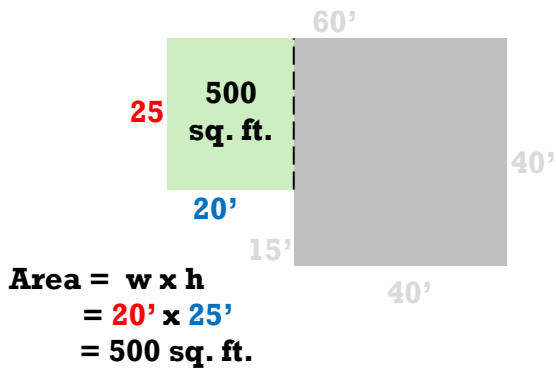
---

---

---

---

What is the area of this field?



---

---

---

---

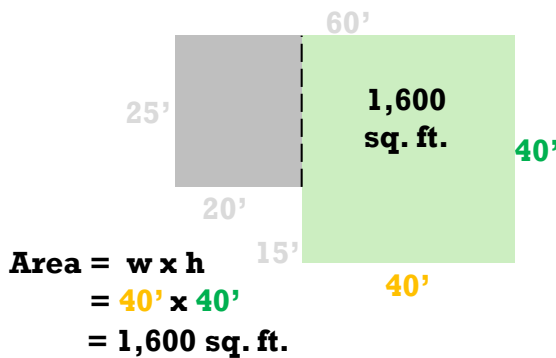
---

---

---

---

What is the area of this field?



---

---

---

---

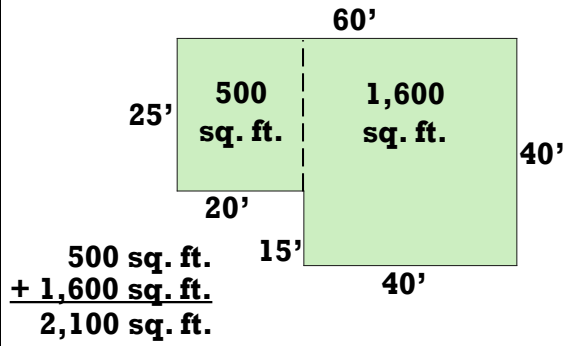
---

---

---

---

**What is the area of this field?**



---

---

---

---


---

---

---

---

**How much wood flooring would be needed to cover this entryway?**



---

---

---

---

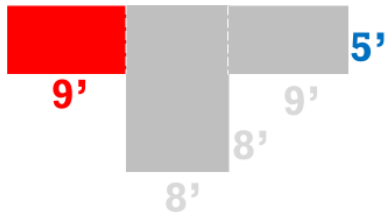
---

---

---

---

**How much wood flooring would be needed to cover this entryway?**



---

---

---

---

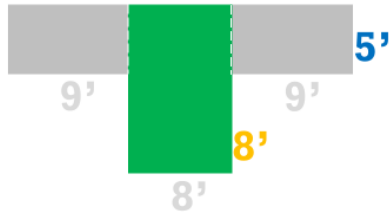
---

---

---

---

**How much wood flooring would be needed to cover this entryway?**



---

---

---

---

---

---

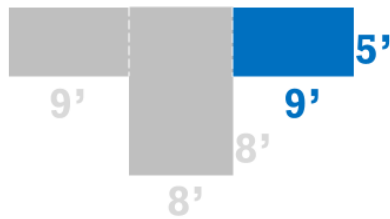
---

---

---

---

**How much wood flooring would be needed to cover this entryway?**



---

---

---

---

---

---

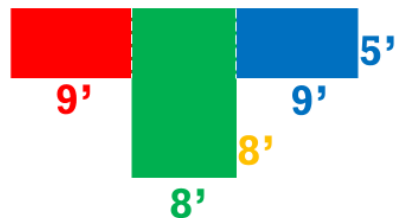
---

---

---

---

**How much wood flooring would be needed to cover this entryway?**



---

---

---

---

---

---

---

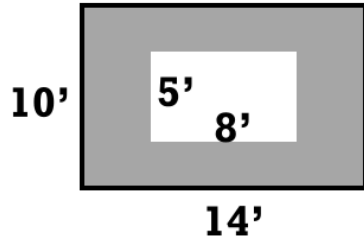
---

---

---

What is the perimeter of the outside (bold line) of this figure?

What is the area of the shaded part?



---

---

---

---

---

---

---

---

---

---

What is the perimeter of the outside (bold line) of this figure?

What is the area of the shaded part?



---

---

---

---

---

---

---

---

---

---